

# Year 1 Maths Activity Mat

①

## Section 1

Put in the missing numbers.

12		14		16		18		20
----	--	----	--	----	--	----	--	----

## Section 2

Add 2 more lollies.



There would be  lollies altogether.

## Section 3


What's the missing number?

$$12 - \square = 10$$




## Section 4

Which snake is the shortest?



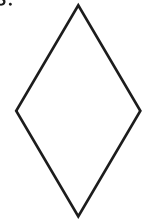
## Section 5

Two dogs eat 5 biscuits each. How many biscuits did they eat altogether?



## Section 6

Colour half of these shapes.



## Section 7

Circle the even numbers.

12

7

16

13

8

## Section 8

$$16 + \square = 20$$



$$11 + \square = 20$$



# Year 1 Maths Activity Mat: 1

## Answers

### Section 1

Put in the missing numbers.

12	13	14	15	16	17	18	19	20
----	----	----	----	----	----	----	----	----

### Section 2

Add 2 more lollies.



There would be  lollies altogether.

### Section 3


What's the missing number?

$$12 - \boxed{2} = 10$$




### Section 4

Which snake is the shortest?



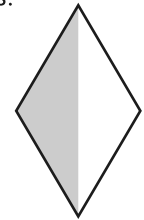
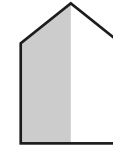
### Section 5

Two dogs eat 5 biscuits each. How many biscuits did they eat altogether?



### Section 6

Colour half of these shapes.



### Section 7

Circle the even numbers.

12

7

16

13

8

### Section 8

$$16 + \boxed{4} = 20$$



$$11 + \boxed{9} = 20$$

